



# I Know 4-H

Draw the 4-H Symbol:

Can you list the 4 H's of 4-H?

1. \_\_\_\_\_

2. \_\_\_\_\_

3. \_\_\_\_\_

4. \_\_\_\_\_

**Motto**  
"To Make the Best Better"

**Slogan**  
"Learn By Doing"

Use the 4 H's to complete the 4-H pledge:

I pledge my \_\_\_\_\_

to clearer thinking, my

\_\_\_\_\_ to greater

loyalty. My \_\_\_\_\_

to larger service and my

\_\_\_\_\_ to better

living for my club, my community, my country

and my world.

Colors:


What are the 4-H colors?

\_\_\_\_\_  
This color represents springtime and nature's most common color.

\_\_\_\_\_  
This color represents innocence and purity.

## My 4-H Project

Please include a photograph or draw a picture of your animal(s) in the space provided.



Which animal(s) are you planning to show at the Coastal Plains Junior Livestock Show and Sale?

---

---

How did you get your animals?

---

---

**Animal Inventory:**

Name	Identification	Breed	Sex	Date of Birth

\*Identification can be a registration number, tattoo, microchip, etc.

## Animal Care

1. What type of feed does your animal eat?

---

---

2. Where does the feed come from?

---

---

3. What do you do to take care of your animal?

---

---

---

---

---

---

---

---

4. Does anyone help you care for your animals?

---

---

---

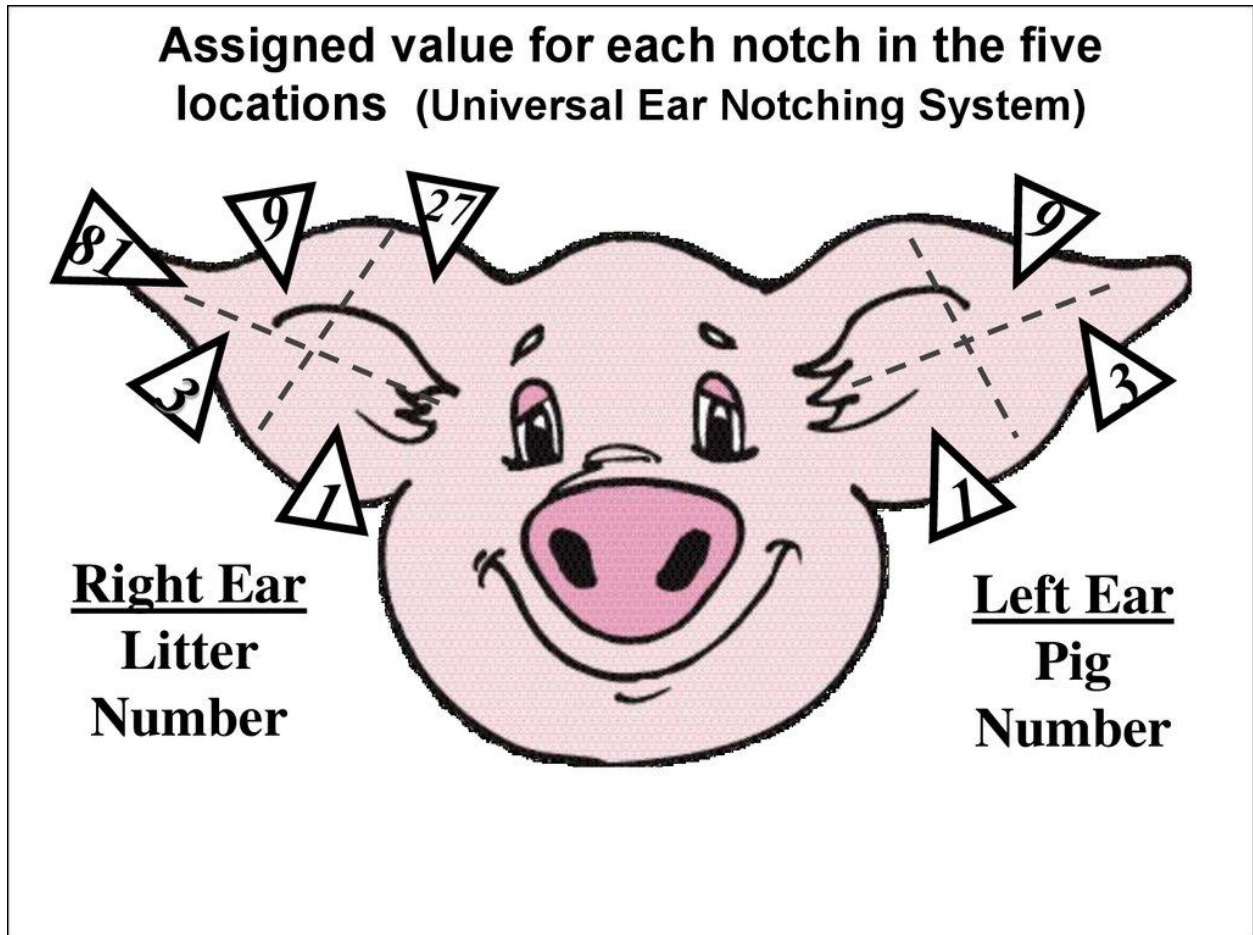
---

# Swine

## Universal Ear-Notching System

Ear-notching helps identify a pig's litter and which one of the litter it is, giving each pig a unique identity number. Notches are placed in one of five locations in the pig's right ear — to show the litter number — and in one of three locations in the left ear — to show the individual pig number.


Using the image below, complete the worksheet.



## Swine Ear Notching Worksheet

Directions: Identify the litter number and pig number for each piglet below


1)



Pig # \_\_\_\_\_

Litter # \_\_\_\_\_


2)



Pig # \_\_\_\_\_

Litter # \_\_\_\_\_


3)



Pig # \_\_\_\_\_

Litter # \_\_\_\_\_


4)



Pig # \_\_\_\_\_

Litter # \_\_\_\_\_

5)




Pig # \_\_\_\_\_

Litter # \_\_\_\_\_

## Cattle Cuts of Beef

Color where your favorite cut of meat is on the steer below:



Match the following cuts of meat with their descriptions:

- |               |   |
|---------------|---|
| _____ Chuck   | A. Source of bone in steaks and roasts                |
| _____ Rib     | B. Source of short ribs, prime rib and rib eye steaks |
| _____ Brisket | C. Located in the breast or lower chest area          |
| _____ Loin    | D. Source of T-bone and Porterhouse steaks            |
| _____ Round   | E. Contain leaner, lower fat cuts of meat             |
| _____ Flank   | F. Source of lean cuts like london broil flank steak  |
| _____ Plate   | G. Source of cheaper, more fatty meat                 |
| _____ Shank   | H. The toughest of all cuts                           |





## Lambs

Let's show lambs! Here is your chance to compare good showmanship skills with poor showmanship skills. Which of these skills do you plan to use when you show your lamb? Cut out the following skills and glue below as good or poor showing skills.



Clean lamb

Dirty lamb

Good attitude

Watch the judge

Eyes looking down

Wear shorts and flip flops

Clothes neat and clean

Stand between judge and lamb

Good

Poor

## **Photos and Supporting Materials**

Use up to three pages to include pictures and other supporting materials that you would like to share.

## Photos and Supporting Materials

## Photos and Supporting Materials